
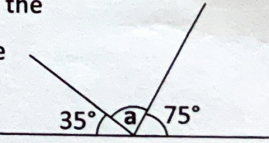
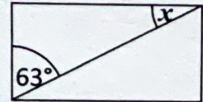


Name: _____

Date: _____

Class/Group: _____

A: Place Value, Add and Subtract		B: Multiply, Divide and Fractions		C: Fractions and Geometry	
1. What is the value of the 3 in this number? 1,348,567	5:1	11. Circle all the multiples of 16. 16 22 28 32	5:8	21. A bag of flour weighed 2.25 kilograms.	5:18
2. Write six hundred and eighteen thousand and twelve in digits.	5:1	12. Circle the composite (non-prime) numbers? 1 2 4 6 9 11	5:9	0.725 kilograms are used in a recipe. How many kilograms of flour are left?	
3. Round 247,599 to the nearest hundred thousand .	5:2	13. $4,962 \div 6$	5:10	22. Which of these is the largest?	5:19
4. What is the missing number? 328,935 428,935 <input type="text"/> 628,935	5:2	14. 670.2×10	5:11	a. $\frac{12}{25}$ b. 40% c. 0.55	
5. Find the difference in temperatures. <input type="text"/> London -3°C <input type="text"/> Glasgow -10°C	5:3	15. Complete this sequence of cube numbers . 1 8 27 <input type="text"/>	5:12	23. Draw an angle of 75°	5:25
6. Write this number in Roman Numerals: 349	5:4	16. Write $<$, $=$ or $>$ to make this correct: $\frac{4}{7}$ <input type="text"/> $\frac{12}{21}$	5:13		
7. $9,250 - 6,895 =$	5:5	17. Find an equivalent fraction of $\frac{60}{100}$. 	5:14	24. Calculate the missing angle labelled a: 	5:26
8. $18,394 + 9,824 =$	5:5	18. Write $3\frac{4}{5}$ as an improper fraction .	5:15		
9. Complete this sum without written working. $16,800 - 2,400 =$	5:6	19. $\frac{5}{9} \times 18 =$	5:16	25. A diagonal has been drawn through this rectangle. Calculate the angle labelled x. 	5:27
10. 27,487 seats out of 35,000 are taken. How many are empty?	5:7	20. Round 3.29 to the nearest whole number.	5:17		
Total (A)		Total (B)		Total (C)	
Test Total (A+B+C)		R (0-9)	Y (10-19)	G (20-25)	